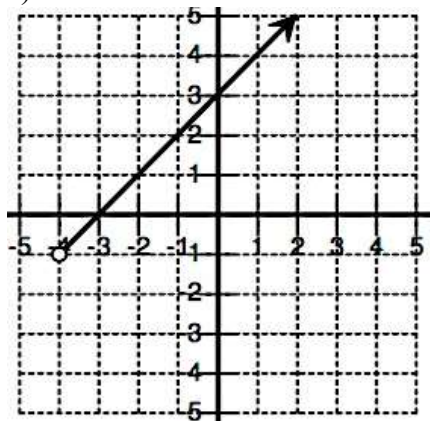


Domain and Range

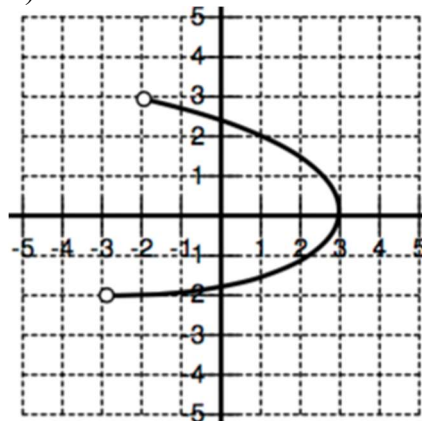
1. State the Domain and Range in Interval and Set notation

a)

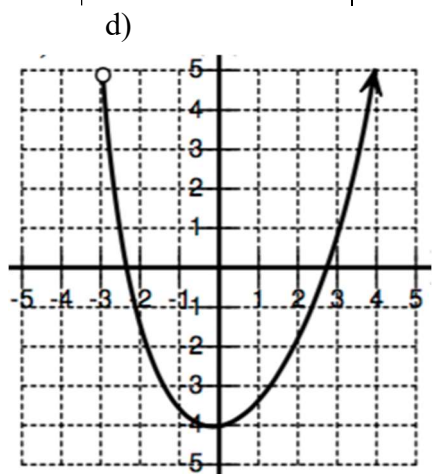


	Set	Interval
Domain		
Range		

b)



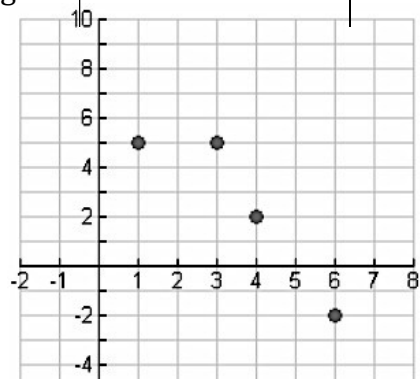
c)



	Set	Interval
Domain		
Range		

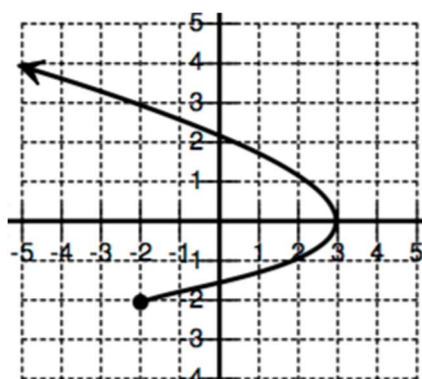
	Set	Interval
Domain		
Range		

	Set	Interval
Domain		
Range		



e)

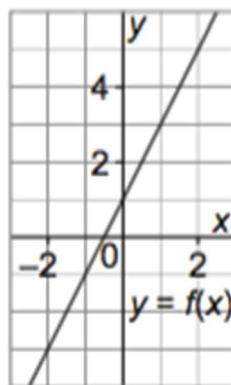
f)



Domain	
Range	

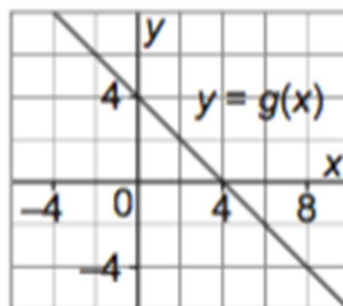
	Set	Interval
Domain		
Range		

2. Given the graph of the function $y = f(x)$
a) Find the range value when the domain value is 2



- b) Find the domain value when the range value is -3

3. Given the graph of the function $y = g(x)$
a) Find the range value when the domain value is -2



- b) Find the domain value when the range value is -4